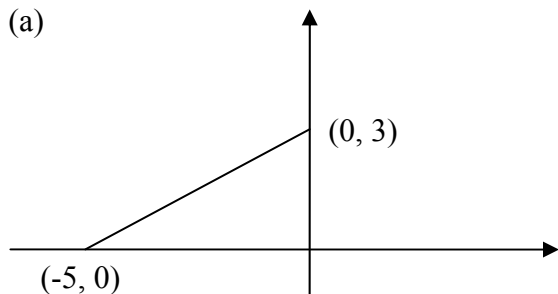


Worksheet: Section 1.2

Name _____ Partner(s) _____

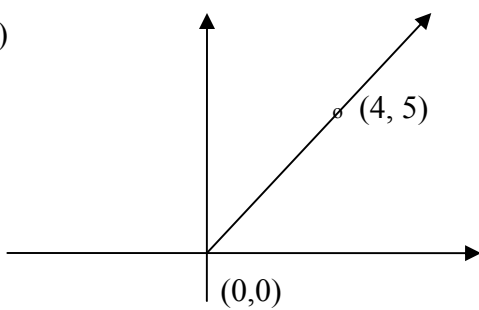
1. Find the distance between the points.

(a)

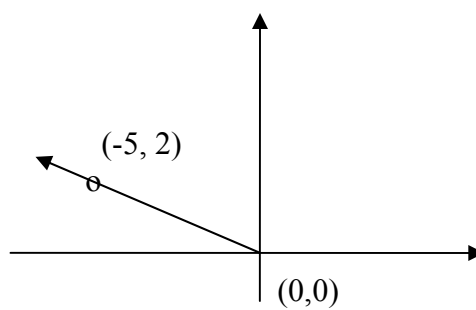


(b) $(-3, 7)$ and $(2, -10)$

(c)



(d)



2. In (c) above what does 4 represent geometrically? What does 5 represent geometrically?

3. In (d) what does -5 represent? What does 2 represent?